

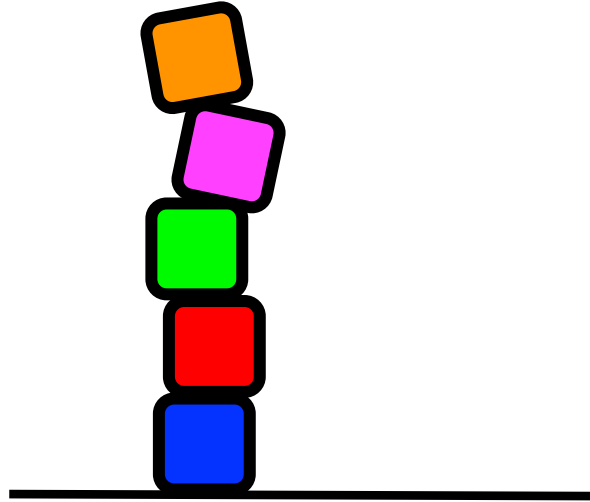
Year 1

Additive Fluency 1

Week 9

Number 5 and number 6

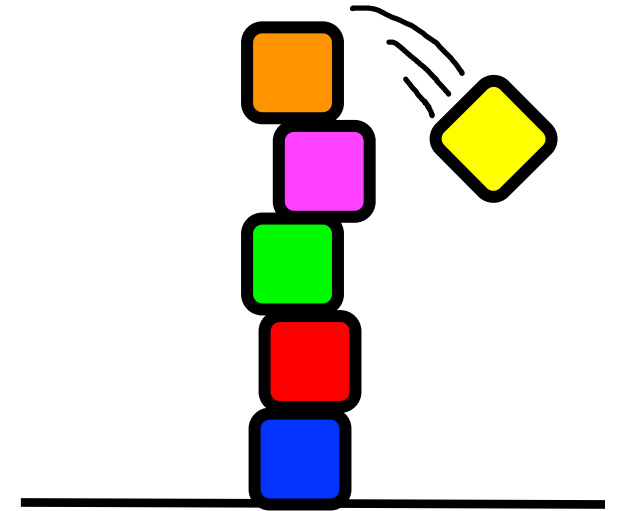
6 is 1 more than...



Make a tower 5 blocks tall.

Now change it into a tower 6 blocks tall.

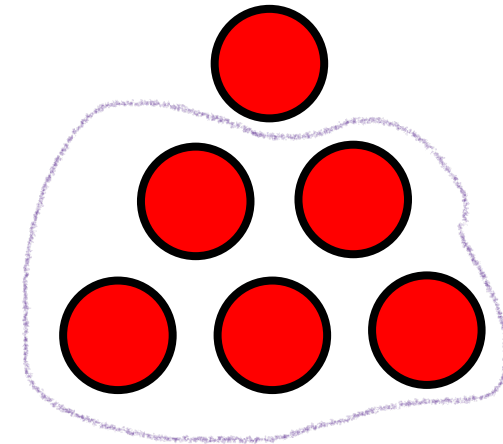
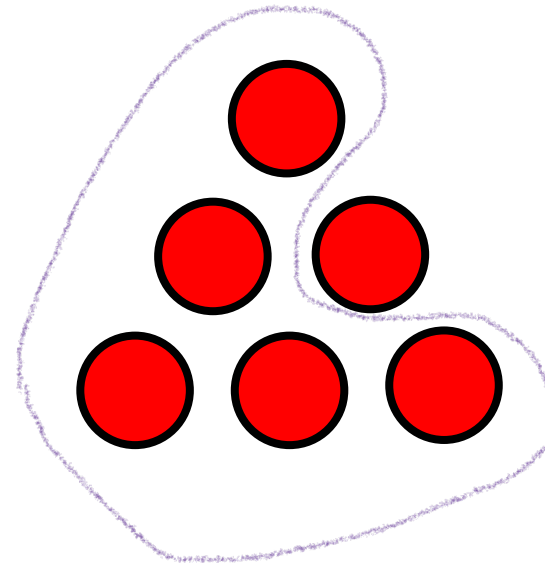
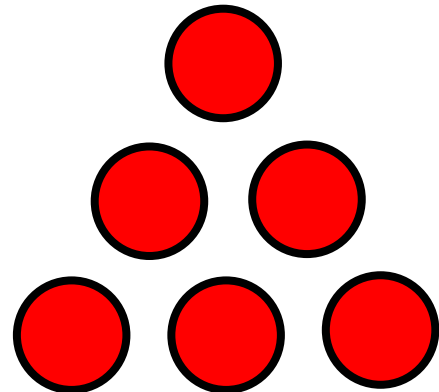
Does it balance!?




Put 6 objects in a pattern.

Put a loop around 5.

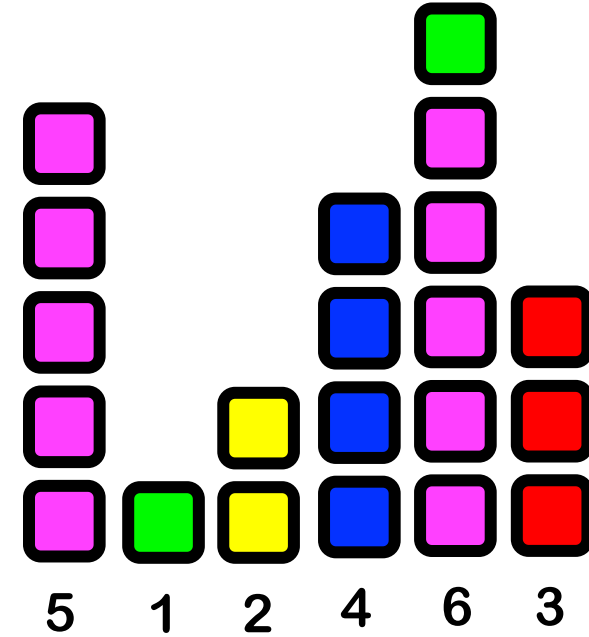
Try different ways.



Number friends



Jumble the numbers.
Move one number at a time.
Put them in the correct order.






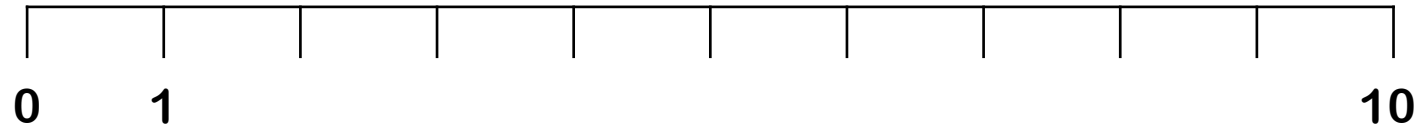
| | | | | | | | | | |
|----|----|----|----|----|----|----|----|----|-----|
| 1 | 2 | 3 | 4 | 5 | 6 | 7 | 8 | 9 | 10 |
| 11 | 12 | 13 | 14 | 15 | 16 | 17 | 18 | 19 | 20 |
| 21 | 22 | 23 | 24 | 25 | 26 | 27 | 28 | 29 | 30 |
| 31 | 32 | 33 | 34 | 35 | 36 | 37 | 38 | 39 | 40 |
| 41 | 42 | 43 | 44 | 45 | 46 | 47 | 48 | 49 | 50 |
| 51 | 52 | 53 | 54 | 55 | 56 | 57 | 58 | 59 | 60 |
| 61 | 62 | 63 | 64 | 65 | 66 | 67 | 68 | 69 | 70 |
| 71 | 72 | 73 | 74 | 75 | 76 | 77 | 78 | 79 | 80 |
| 81 | 82 | 83 | 84 | 85 | 86 | 87 | 88 | 89 | 90 |
| 91 | 92 | 93 | 94 | 95 | 96 | 97 | 98 | 99 | 100 |

Find 25. Find 26.
Count to 35. Now find 36.
Count to 45. Now count on to 66.

Find 5 and 6 on a number line

Show 5 and 6 on different number lines

Do you need to count from the start?



Parts of 5. Parts of 6

Show 5 on one hand.



Show 5 on two hands.

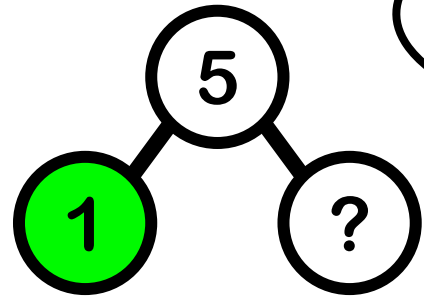


Show 6 on two hands.



So, there are two different bonds to 5.
How many different bonds to 6?

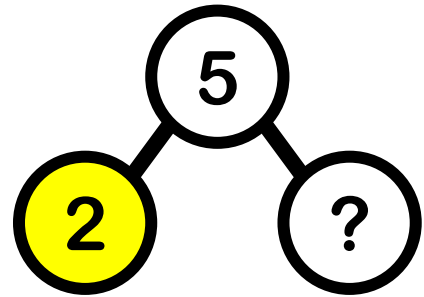
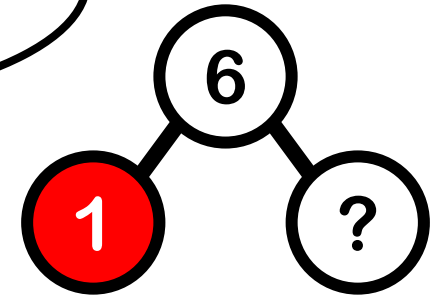
Number stories



Five on a bus. Two got off.
Now there are...

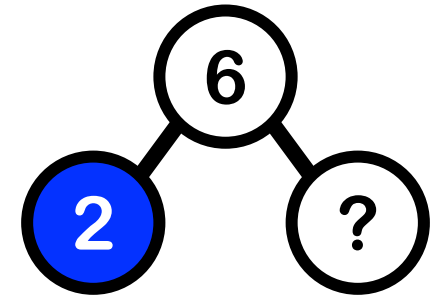
Six on a bus. Two got off.
Now there are...

Six in a field. Two escaped.
Now there are...



I have 3. You have 6. How many more do you have?

I have 3. You have 2 more. How many do you have?



Draw a picture to make sense of each story.

There are 5 animals in a field. 3 are young. How many are old?

